

Review 1

30

Choose the correct answer and write its number in the brackets provided.

[7 marks]

- Which of the following shows five million, twenty thousand and thirteen correctly?


(1) 5 002 013	(3) 5 020 130	
(2) 5 020 013	(4) 5 200 013	()

- Which of the following is **not** equal to 70×190 ?

(1) 700×19	(3) $10 \times 70 \times 90$	
(2) $190 \times 7 \times 10$	(4) $7 \times 19 \times 100$	()

- Which of the following shows 3 051 107 correctly?

(1) three million, five thousand, one hundred and seven	
(2) three million, fifty-one thousand, one hundred and seven	
(3) three million, five hundred and eleven thousand, and seven	
(4) thirty million, fifty-one thousand, one hundred and seven	()

-  What is the value of $36 + 6 \div 3 \times 4 - 11$?

(1) 33	(3) 45	
(2) 44	(4) 108	()

- $6\,129\,374 = 6\,000\,000 + \underline{\hspace{2cm}} + 20\,000 + \underline{\hspace{2cm}} + 374$
 What are the two missing numbers?

(1) 10 000, 9000	(3) 120 000, 9000	
(2) 100 000, 9000	(4) 1 000 000, 9000	()

6. What is the value of $368\,400 \div 400$?

(1) 92 100

(3) 921

(2) 9210

(4) 92.1

()

7. A shopkeeper had 2234 blue marbles and 7586 yellow marbles. He sold 1680 marbles and packed the remaining marbles equally into 44 bags. How many marbles were there in each bag?

(1) 180

(3) 261

(2) 185

(4) 262

()

Write your answers on the lines provided.


[8 marks]

8. Write 6 100 049 in words.

9. Write four million, one hundred and fourteen thousand, and forty-one in numerals.

10. $5\,056\,605 = 5\,000\,000 + \underline{\hspace{2cm}} + 600 + 5$
What is the missing number? _____

11. What is value of $(8 - 7 + 6) - (2 + 3 - 4)$? _____

 12. What is the value of $31 \times (6 + 8) \div 2 - 60 \div 15$? _____

 13. Find the product of 1213 and 600. _____

14. Find the quotient of $658\,500 \div 500$. _____

15. What is the value of $76\,400 \div 400$? _____


Do these word problems. Show your working clearly in the space provided.



- 16.** Mr Douglas installed some cabinets in his kitchen. He paid a deposit of \$520 and the rest in monthly instalments of \$315 for two years. How much did it cost to install the cabinets? **[2 marks]**

- 17.** A factory produced 15 300 T-shirts in January. It produced 2500 more T-shirts in February than in January. It produced twice the number of T-shirts in March than in February. What was the total number of T-shirts that the factory had produced in these three months? **[2 marks]**

18. On a farm, there are a total of 50 cows and chickens. These animals have 124 legs in all. How many more chickens than cows are there? **[3 marks]**

-  19. There were a total of 625 goldfish and guppies in an aquarium. There were 79 more guppies than goldfish. The goldfish were put equally into 21 bags and 10 such bags of goldfish were sold. How many more guppies than goldfish were left? **[5 marks]**

20. Janet bought 32 boxes of greeting cards. She rearranged the greeting cards into packs of 3 and sold each pack at \$10. She received \$960 from the sale. How many greeting cards were there in each box? **[3 marks]**