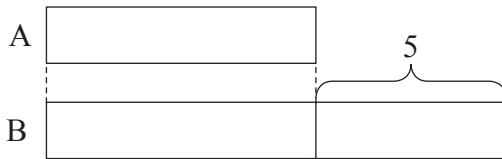


Comparison Model

This is used to compare the quantities between two or more models.

Method

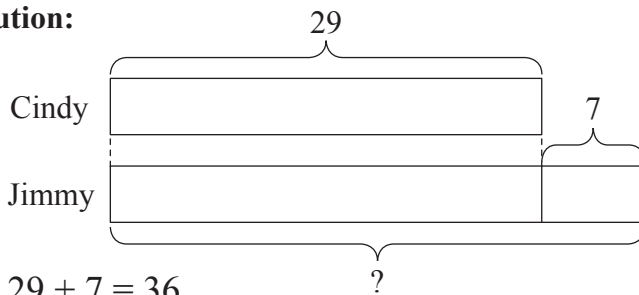


The model for B shows that it is 5 more than A.

Example 1

Cindy has 29 stickers.
Jimmy has 7 more stickers than Cindy.
How many stickers does Jimmy have?

Solution:



$$29 + 7 = 36$$

Jimmy has 36 stickers.

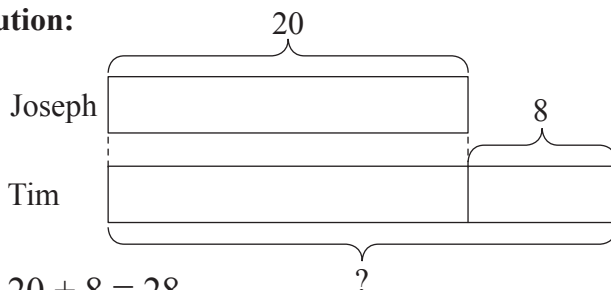
Working

$$\begin{array}{r} 29 \\ + 7 \\ \hline 36 \end{array}$$

Example 2

Joseph has 20 tickets.
He has 8 fewer tickets than Tim.
How many tickets does Tim have?

Solution:



$$20 + 8 = 28$$

Tim has 28 tickets.

Since Joseph has 8 fewer tickets than Tim, Tim has 8 more tickets than Joseph. Therefore, the model for Tim is drawn as shown.

$$\begin{array}{r} 20 \\ + 8 \\ \hline 28 \end{array}$$