


# Review 7



Read and write the correct time in each blank.


[6 marks]

1.




\_\_\_\_\_

2.




\_\_\_\_\_

3.




\_\_\_\_\_

4.




\_\_\_\_\_

5.



\_\_\_\_\_

6.

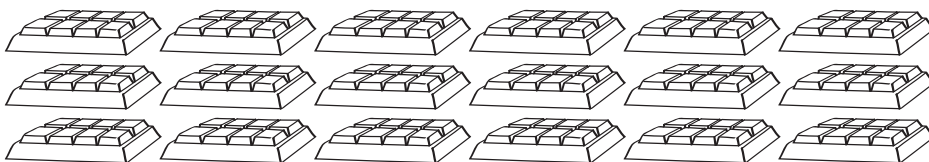


\_\_\_\_\_

Fill in each blank with the correct answer.


[4 marks]

7.



Molly has 18 bars of chocolate. She distributes them equally among her 6 friends. Each friend receives \_\_\_\_\_ bars of chocolate.

8. There are 20 apples.  
Place 4 apples on one plate.




There are \_\_\_\_\_ plates of apples.

9. There are 18 ribbons. Each girl has 3 ribbons.



There are \_\_\_\_\_ girls.

10. There are 16 balloons. Each child has 4 balloons.




There are \_\_\_\_\_ children.

Fill in the correct time on the lines provided.


[6 marks]

11.




Mindy goes to the library at \_\_\_\_\_.

12.




Chris goes to school at \_\_\_\_\_.

13.




Rachel wakes up at \_\_\_\_\_.

14.




Andy eats his lunch at \_\_\_\_\_.

15.



Sandy sleeps at \_\_\_\_\_.

16.



James goes to the park at \_\_\_\_\_.

Do these word problems.


[4 marks]

17. Winnie has 20 stickers. She gives an equal number of stickers to 5 of her friends. How many stickers does each friend receive?



Each friend receives \_\_\_\_\_ stickers.

18.  $20 \div 5 = 4$



Each boy got \_\_\_\_\_.

