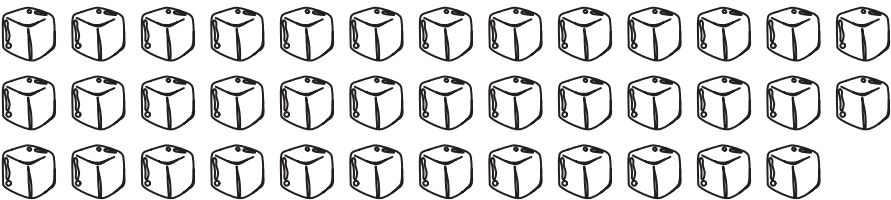


# Review 5



Circle in groups of 10. Count and write the correct numbers on the lines provided. **[2 marks]**

1.  \_\_\_\_\_


2.  \_\_\_\_\_

Fill in each blank with the correct answer. **[2 marks]**


3. \_\_\_\_\_ + 9 = 29

4. 30 + \_\_\_\_\_ = 35

5. Count the number of items for each set. Fill in each blank with the correct answer. **[4 marks]**



Set A: \_\_\_\_\_

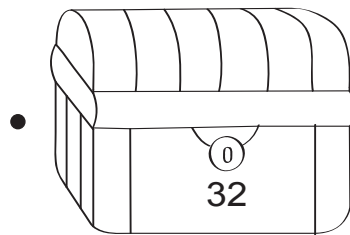

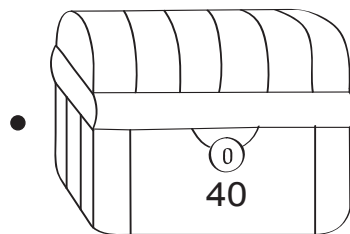

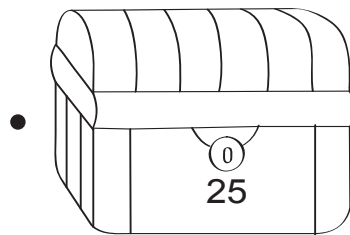

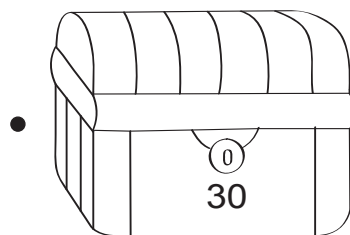



Set B: \_\_\_\_\_

\_\_\_\_\_ is greater than \_\_\_\_\_.

\_\_\_\_\_ is smaller than \_\_\_\_\_.

6. Match the following keys to the correct chests. [4 marks]



Complete the number patterns.

[2 marks]

7. 27, \_\_\_\_\_, \_\_\_\_\_, 33, 35

8. \_\_\_\_\_, 37, 34, \_\_\_\_\_, 28

Add these numbers.

[4 marks]

9. 
$$\begin{array}{r} 36 \\ + 3 \\ \hline \\ \hline \end{array}$$

11. 
$$\begin{array}{r} 27 \\ + 9 \\ \hline \\ \hline \end{array}$$

10. 
$$\begin{array}{r} 20 \\ + 17 \\ \hline \\ \hline \end{array}$$

12. 
$$\begin{array}{r} 15 \\ + 25 \\ \hline \\ \hline \end{array}$$

Subtract these numbers.

[4 marks]

13. 
$$\begin{array}{r} 28 \\ - 7 \\ \hline \\ \hline \end{array}$$

15. 
$$\begin{array}{r} 33 \\ - 5 \\ \hline \\ \hline \end{array}$$

14. 
$$\begin{array}{r} 39 \\ - 14 \\ \hline \\ \hline \end{array}$$

16. 
$$\begin{array}{r} 40 \\ - 24 \\ \hline \\ \hline \end{array}$$

Do these word problems. Show your working clearly. [8 marks]

17. Jack has 15 crayons. Jill has 12 crayons. How many crayons do they have altogether?

They have \_\_\_\_\_ crayons altogether.

- 18.** Mrs Chan bakes 38 cookies. She gives 8 of them to her neighbour. How many cookies has Mrs Chan left?

Mrs Chan has \_\_\_\_\_ cookies left.

- 19.** There are 26 pigeons on the roof. There are 6 more pigeons on the field than on the roof. How many pigeons are there on the field?

There are \_\_\_\_\_ pigeons on the field.

20. Mr Wong sells 34 pears and 19 mangoes at his stall. How many more pears than mangoes does Mr Wong sell?

Mr Wong sells \_\_\_\_\_ more pears than mangoes.