


Review 5

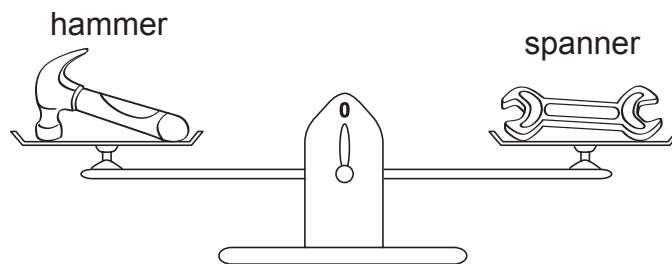
Fill in each blank with 'heavier than', 'lighter than' or 'as heavy as'.
[3 marks]

1.




The monkey is _____ the squirrel.

2.



The hammer is _____ the spanner.

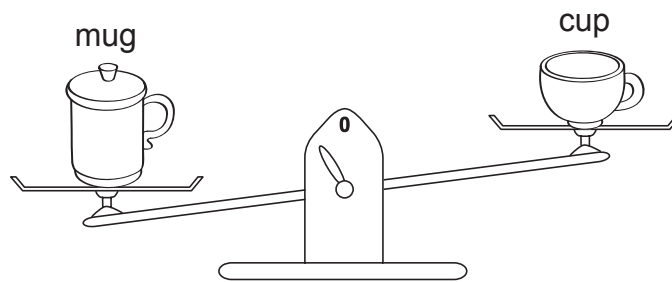
3.



The lettuce is _____ the cabbage.

Fill in each blank with the correct answer.

4.




The _____ is lighter.

The _____ is heavier.

[2 marks]

5.



The _____ is the heaviest.

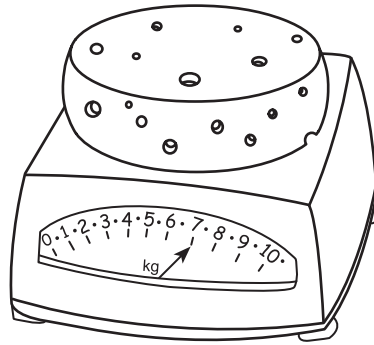
The _____ is the lightest.

Arrange the items from lightest to heaviest.

_____, _____, _____
lightest


[3 marks]

6.



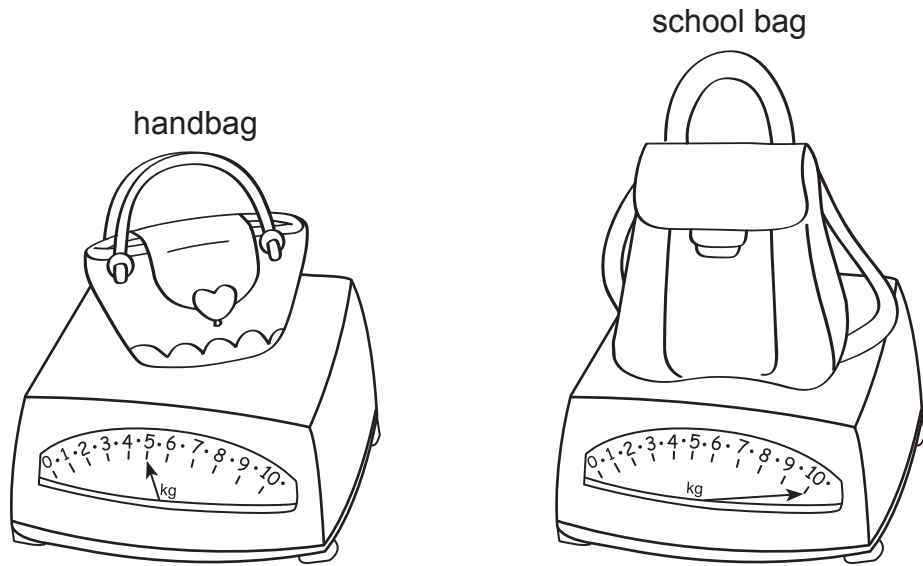
The mass of the wheel of cheese is _____ kg. [1 mark]

7.



The mass of the girl is _____ kg. [1 mark]

8.



The mass of the handbag is _____ kg.

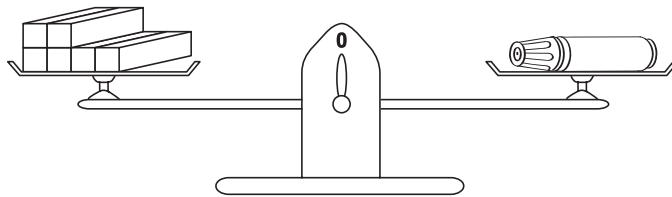
The mass of the school bag is _____ kg.

The _____ is heavier.

The _____ is lighter.

[4 marks]

9.

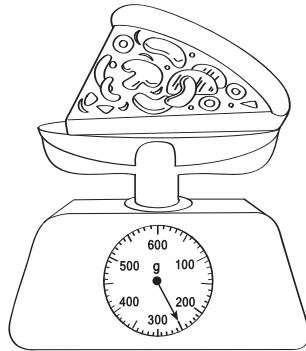


The mass of each  is 1 g.

The mass of the water bottle is about _____ g.


[1 mark]

10.



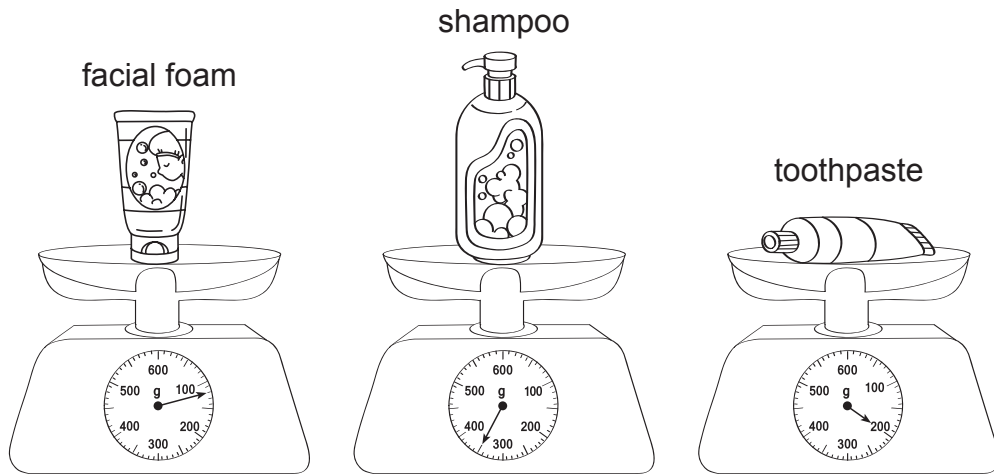
The mass of the slice of pizza is about _____ g. [1 mark]

11.



The mass of the chick is _____ g. [1 mark]

12.



- (a) The mass of the facial foam is _____ g.
- (b) The mass of the shampoo is _____ g.
- (c) The mass of the toothpaste is _____ g.
- (d) The _____ is the lightest.
- (e) The _____ is the heaviest.
- (f) Arrange the toiletries from heaviest to lightest.

_____, _____, _____
heaviest [6 marks]

Do these word problems. Show your working clearly in the space provided.

- 13.** Jacob weighs 26 kg. Janice weighs 19 kg. How much do they weigh altogether? **[1 mark]**

They weigh _____ kg altogether.

- 14.** Mdm Tan had 437 g of sugar. After baking some pastries, she had 152 g of sugar left. How much sugar did she use for baking the pastries? **[1 mark]**

She used _____ g of sugar for baking the pastries.

- 15.** There are 10 tables in a tutorial room. The mass of each table is 9 kg. What is the total mass of the tables? **[1 mark]**

The total mass of the tables is _____ kg.

- 16.** The mass of an orange is 200 g. It is cut into 4 equal slices. What is the mass of each slice of orange? **[1 mark]**

The mass of each slice of orange is _____ g.

- 17.** Mr Wong bought a batch of 384 pens for his shop on Monday. He bought another batch of 288 pens on Tuesday.
- (a) How many more pens did Mr Wong buy on Monday than on Tuesday? **[1 mark]**
- (b) How many pens did he buy in the two days? **[1 mark]**

(a)

Mr Wong bought _____ more pens on Monday than on Tuesday.

(b)

He bought _____ pens in the two days.

- 18.** Ignatius has 715 stickers in his collection. He gives his brother 157 stickers and his cousin another 83 stickers. How many stickers does Ignatius have left? **[2 marks]**

Ignatius has _____ stickers left.

- 19.** Starsha has 16 m of pink ribbon and 18 m of purple ribbon. Jermaine has 7 m of ribbon less than the total length of ribbon that Starsha has. How much ribbon does Jermaine have? **[2 marks]**

Jermaine has _____ m of ribbon.

- 20.** Aunt Grace knits 17 cm of a scarf in the morning. She knits 13 cm of the scarf in the afternoon and another 10 cm in the evening. How much of the scarf does Aunt Grace knit altogether? **[2 marks]**

Aunt Grace knits _____ cm of the scarf altogether.