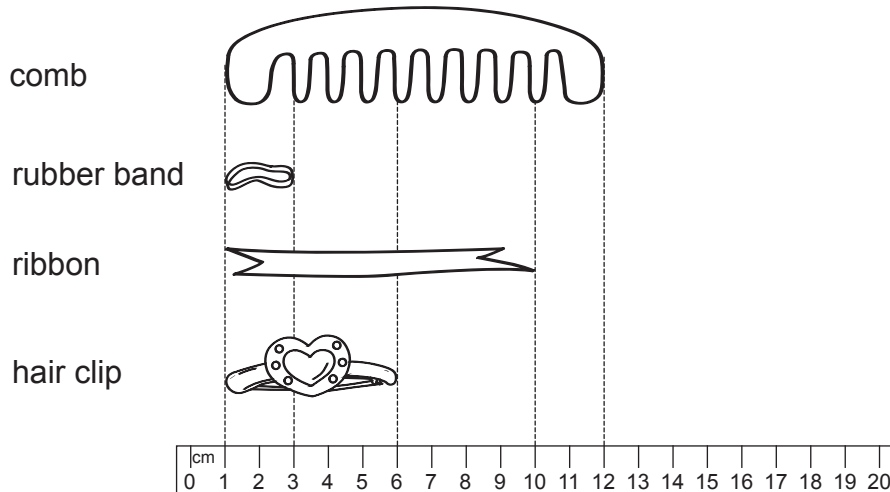


Review 4

Fill in each blank with the correct answer.

1.

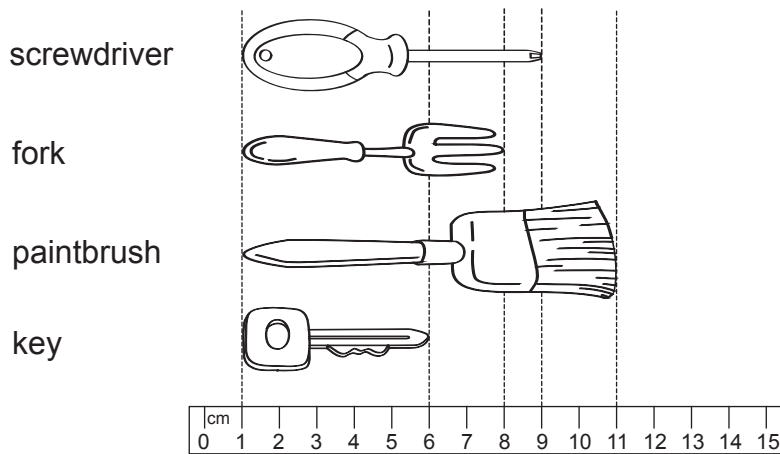
[8 marks]



- (a) The hair clip is _____ cm long.
- (b) The ribbon is _____ cm long.
- (c) The comb is _____ cm long.
- (d) The rubber band is _____ cm long.
- (e) The ribbon is shorter than the comb by _____ cm.
- (f) The hair clip is longer than the rubber band by _____ cm.
- (g) The total length of the hair clip and the comb is _____ cm.
- (h) Arrange the items from shortest to longest.
-

2.

[7 marks]



- (a) The key is _____ cm long.
- (b) The paintbrush is _____ cm long.
- (c) The screwdriver is _____ cm long.
- (d) The fork is _____ cm long.
- (e) The key is shorter than the fork by _____ cm.
- (f) The paintbrush is longer than the screwdriver by _____ cm.
- (g) Arrange the items from longest to shortest.

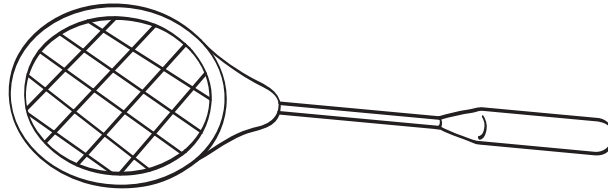
3. (a) Draw a line 7 cm long with the use of a centimetre ruler. Label it AB. **[1 mark]**

(b) Draw a line 3 cm shorter than AB. **[1 mark]**

4. (a) Draw a line 4 cm long with the use of a centimetre ruler. Label it CD. **[1 mark]**


(b) Draw a line 2 cm longer than CD. **[1 mark]**

5. Measure the badminton racket with a centimetre ruler.



The badminton racket is _____ cm long. **[1 mark]**

6. Measure the truck with a centimetre ruler.



The truck is _____ cm long. **[1 mark]**

Fill in each blank with the correct answer. [5 marks]

7. $40 \text{ cm} + 68 \text{ cm} = \underline{\hspace{2cm}} \text{ cm}$

8. $435 \text{ cm} - 79 \text{ cm} = \underline{\hspace{2cm}} \text{ cm}$

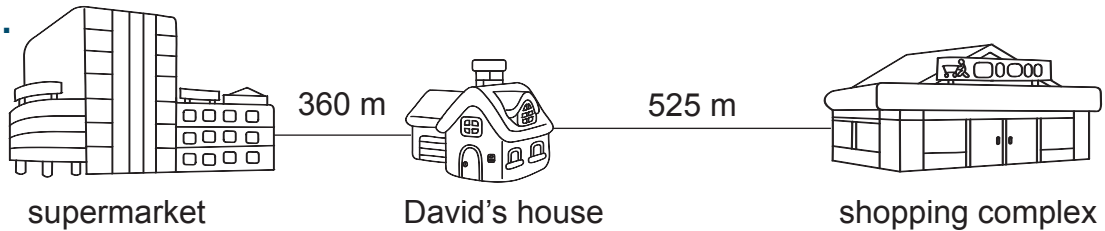
9. $616 \text{ cm} - 327 \text{ cm} = \underline{\hspace{2cm}} \text{ cm}$

10. $125 \text{ cm} + 225 \text{ cm} = \underline{\hspace{2cm}} \text{ cm}$

11. $609 \text{ m} + 163 \text{ m} = \underline{\hspace{2cm}} \text{ m}$

Do these word problems. Show your working clearly in the space provided. [9 marks]


12.



How much further is David's house from the shopping complex than from the supermarket?

David's house is _____ m further from the shopping complex than from the supermarket.

13. Amanda jogs from her house to the stadium every day. Her jogging route is shown below.



How far does Amanda jog from her house to the stadium?

Amanda jogs _____ m from her house to the stadium.

- 14.** Samantha placed 5 rulers side by side. Each ruler had a length of 10 cm. What was the total length of the 5 rulers?

The total length of the 5 rulers was _____ cm.

- 15.** Jonathan makes 10 clay models in a day. How many clay models does he make in a week?

He makes _____ clay models in a week.

- 16.** There are 6 pencils in a box. How many pencils are there in 4 such boxes?

There are _____ pencils in 4 such boxes.

- 17.** Zoe and 3 cousins shared a sum of \$36. How much did each of them receive?

Each of them received \$_____.

- 18.** Mother makes 50 cupcakes. She gives all the cupcakes to some friends. Each friend receives 5 cupcakes. How many friends does Mother give the cupcakes to?

Mother gives the cupcakes to _____ friends.

- 19.** There are 30 pieces of coloured paper in a pack. There are 6 different colours altogether. How many pieces are there for each colour if there is an equal number of pieces for each colour?

There are _____ pieces for each colour.

- 20.** Mrs Wilson has 4 children. She buys a pair of gloves for each child. How many gloves does she buy?

She buys _____ gloves.