


# Review 3


Study at the pictures carefully. Write two multiplication and division equations. **[8 marks]**

1.



$\underline{\hspace{2cm}} \times \underline{\hspace{2cm}} = \underline{\hspace{2cm}}$	$\underline{\hspace{2cm}} \div \underline{\hspace{2cm}} = \underline{\hspace{2cm}}$
$\underline{\hspace{2cm}} \times \underline{\hspace{2cm}} = \underline{\hspace{2cm}}$	$\underline{\hspace{2cm}} \div \underline{\hspace{2cm}} = \underline{\hspace{2cm}}$

2.



$\underline{\hspace{2cm}} \times \underline{\hspace{2cm}} = \underline{\hspace{2cm}}$	$\underline{\hspace{2cm}} \div \underline{\hspace{2cm}} = \underline{\hspace{2cm}}$
$\underline{\hspace{2cm}} \times \underline{\hspace{2cm}} = \underline{\hspace{2cm}}$	$\underline{\hspace{2cm}} \div \underline{\hspace{2cm}} = \underline{\hspace{2cm}}$

**Multiply these numbers. Show your working clearly. [4 marks]**

3. 
$$\begin{array}{r} 147 \\ \times 8 \\ \hline \\ \hline \end{array}$$

5. 
$$\begin{array}{r} 632 \\ \times 4 \\ \hline \\ \hline \end{array}$$

4. 
$$\begin{array}{r} 312 \\ \times 3 \\ \hline \\ \hline \end{array}$$

6. 
$$\begin{array}{r} 500 \\ \times 3 \\ \hline \\ \hline \end{array}$$

**Fill in each blank with the correct answer. [4 marks]**

7. (a) Put 49 marbles equally into 7 bowls.

$$\underline{\hspace{2cm}} \div \underline{\hspace{2cm}} = \underline{\hspace{2cm}}$$

There are  $\underline{\hspace{2cm}}$  marbles in each bowl.

(b) Group 42 students equally into 6 teams.

$$\underline{\hspace{2cm}} \div \underline{\hspace{2cm}} = \underline{\hspace{2cm}}$$

There are  $\underline{\hspace{2cm}}$  students in each team.

(c) Arrange 36 books equally into stacks. There are 9 books in each stack.

$$\underline{\hspace{2cm}} \div \underline{\hspace{2cm}} = \underline{\hspace{2cm}}$$

There are  $\underline{\hspace{2cm}}$  stacks of books.

(d) Place 40 cupcakes equally onto trays. There are 8 cupcakes on each tray.


$$\underline{\hspace{2cm}} \div \underline{\hspace{2cm}} = \underline{\hspace{2cm}}$$

There are  $\underline{\hspace{2cm}}$  trays of cupcakes.


Match each balloon to the correct girl.

[5 marks]


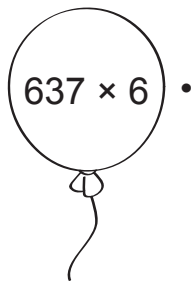
8.




9.




10.



11.



12.



Fill in each blank with the correct answer.

[4 marks]

13.  $8 \times \underline{\hspace{2cm}} = 48$

14.  $9 \times \underline{\hspace{2cm}} = 81$

15.  $\underline{\hspace{2cm}} \times 6 = 60$

16.  $\underline{\hspace{2cm}} \times 7 = 28$

Do these word problems. Show your working clearly in the space provided.

[8 marks]

17. Mr Peters uses 6 pieces of planks to construct a chair. How many pieces of planks does he need to construct 5 such chairs?

18. There are 8 rabbits in a pet shop. There are 3 times as many hamsters as rabbits in the pet shop. How many hamsters are there?

**19.** A 56-cm string is cut equally into 7 pieces. How long is each piece of string?

**20.** Sonia spends \$45 on food and a dress. If she spends 4 times as much on the dress as she does on food, how much does she spend on food?