

Review 2

25

Study the pictures carefully and fill in the blanks with the correct answers. [2 marks]

1.



$$\underline{\quad\quad} + \underline{\quad\quad} = \underline{\quad\quad}$$

2.



$$\underline{\quad\quad} + \underline{\quad\quad} = \underline{\quad\quad}$$


Cross out the correct number of things. Fill in the blanks with the correct answers. [2 marks]

3.



$$4 - 4 = \underline{\quad\quad}$$

4.

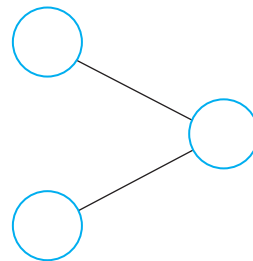


$$8 - 6 = \underline{\quad\quad}$$

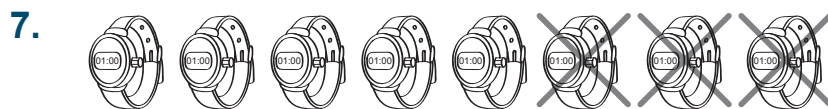
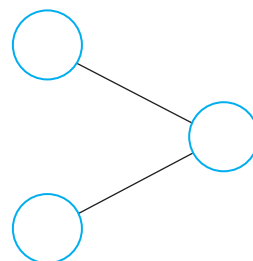
Study the pictures below and fill in the blanks with the correct answers. [5 marks]




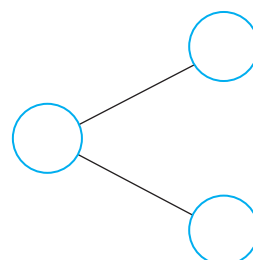
_____ + _____ = _____



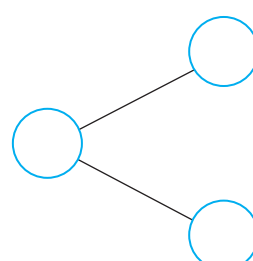
_____ + _____ = _____



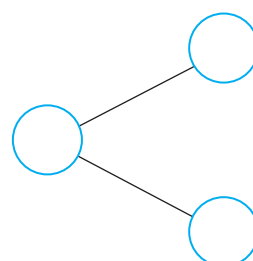
_____ - _____ = _____



_____ - _____ = _____



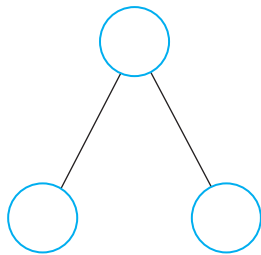
_____ - _____ = _____



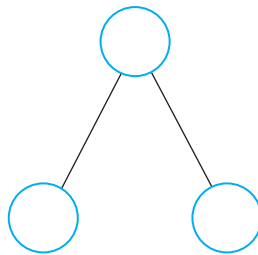
Fill in the missing numbers.

[4 marks]

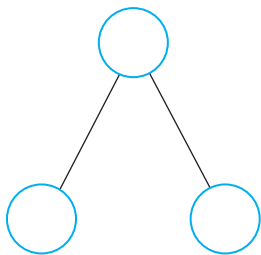
10. $4 + 3 = \underline{\hspace{2cm}}$



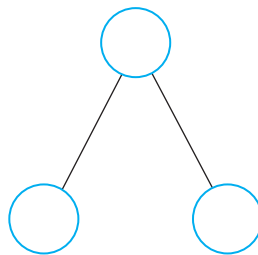
12. $\underline{\hspace{2cm}} - 0 = 7$



11. $5 + \underline{\hspace{2cm}} = 5$



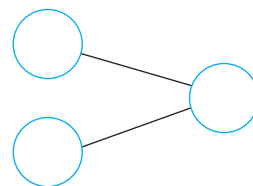
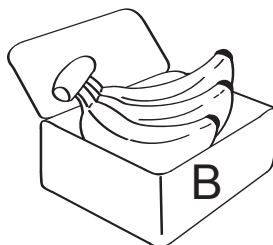
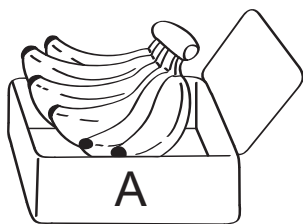
13. $10 - \underline{\hspace{2cm}} = 1$



Write the correct answers on the lines provided.

[4 marks]

14.



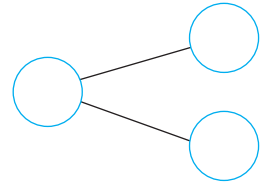

There are bananas in Box A.

There are bananas in Box B.



There are bananas altogether.

15.



There are _____ cats.

_____ cats have short tails.




_____ cats have long tails.

Write a fact family for the picture.

[4 marks]

16.



$$\square + \square = \square$$

$$\square - \square = \square$$

$$\square + \square = \square$$

$$\square - \square = \square$$

Do these word problems. Show your working clearly in the space provided. **[4 marks]**

- 17.** Sally has 7 dolls. Her mother gives her 2 more dolls on her birthday. How many dolls does she have altogether?

She has _____ dolls altogether.

- 18.** There are 10 cars in a car park. 5 cars are driven away. How many cars are there left in the car park?

There are _____ cars left in the car park.

- 19.** Troy gives 4 toy planes to his brother. He has 2 toy planes left. How many toy planes has he at first?

He has _____ toy planes at first.

- 20.** Beth needs 8 stars to win a prize. She has collected 3 stars. How many more stars does she need to collect?

She needs to collect _____ more stars.